

(Following Paper ID and Roll No. to be filled in your Answer Book)

PAPER ID : 2112 Roll No.

| | | | | | | | | | |
|--|--|--|--|--|--|--|--|--|--|
| | | | | | | | | | |
|--|--|--|--|--|--|--|--|--|--|

B.Tech.

(SEM. V) ODD SEMESTER THEORY

EXAMINATION 2013-14

CONTROL SYSTEM

Time : 3 Hours

Total Marks : 100

Note :- Attempt all the questions.

1. Attempt any four parts of the following : (5×4=20)

(a) Find the transfer function of the electrical network shown in the figure : 1.

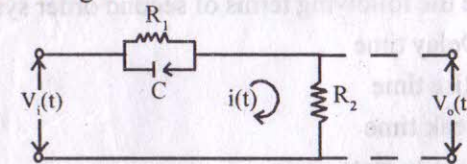


Figure : 1

(b) Compare the open loop control system and closed loop control system, also give few examples for each system.

(c) Find the single block equivalent of figure : 2.

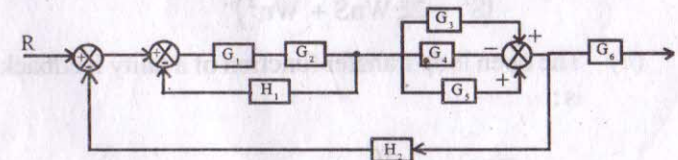


Figure : 2

10×2=20

(a) Define the following :

- (i) Resonance frequency
- (ii) Bandwidth
- (iii) Cut-off rate
- (iv) Phase margin
- (v) Gain margin.

Also discuss the advantages of frequency domain analysis.

(b) A Unity feedback control system has :

$$G(s) = \frac{40}{s(s+2)(s+5)}$$

Draw the Bode Plot. Find Gain Margin.

(c) For the $G(s) = 1/s(s-2)$, $H(s) = 1$, sketch the Nyquist plot and determine the stability of the system.

5. Attempt any two parts of the following : (10×2=20)

(a) Discuss the PI and PD controller with their applications, also find the different error constant for P, I and D.

(b) Define the following terms :

- (i) State
- (ii) State variables
- (iii) State vector
- (iv) State space
- (v) State equation.

Also write the properties of state transition matrix.

(c) A feedback system has a closed loop transfer function

$$\frac{C(s)}{R(s)} = \frac{10(s+4)}{s(s+1)(s+3)}$$

construct the phase variable state model.

- (d) Calculate the sensitivity of the closed loop system shown in figure : 3 with respect to the forward path transfer function at $\omega = 1.5$ rad/sec.

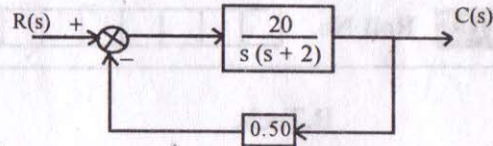


Figure : 3

- (e) Discuss the effect of feedback on :
- Overall gain
 - Stability
 - Noise and Disturbance.
- (f) What is the effect of PD (Proportional Derivative) Controller on steady-state error due to a unit ramp input in second order system ? Prove, mathematically.

2. Attempt any **three** parts of the following : $(6 \frac{2}{3} \times 3 = 20)$

- (a) Define the following terms of second order system :
- Delay time
 - Rise time
 - Peak time
 - Steady state error
 - Settling time.
- (b) Prove that the servomechanism system is a second order system i.e.

$$T(s) = \frac{W_n^2}{(s^2 + 2\xi W_n s + W_n^2)}$$

- (c) The open loop transfer function of a unity feedback system is:

$$G(s) = \frac{\alpha}{s(1 + \beta s)}$$

or this system overshoot reduces from 0.6 to 0.2 due to change in α only. Show that :

$$\frac{(\beta\alpha_1 - 1)}{(\beta\alpha_2 - 1)} \cong 43.$$

Where α_1 and α_2 are values of α for 0.6 and 0.2 overshoot respectively.

- (d) Derive the expression for :
- Rise Time
 - Peak overshoot time for the second order control.
- (e) Find k_p, k_v, k_a for the system having :
- $G(s) = 10/s^2$ and $H(s) = 0.7$

$$(ii) G(s) = \frac{5}{(s^2 + 3s + 5)} \quad H(s) = 0.6.$$

3. Attempt any **two** parts of the following : $(10 \times 2 = 20)$

- (a) Sketch the root locus for a system having :

$$G(s) = \frac{K}{(s+1)} \quad \text{and} \quad H(s) = \frac{(s+1)}{(s^2 + 4s + 5)}$$

and comment on the result.

- (b) For a system having characteristic equation $2s^4 + 4s^2 + 1 = 0$, find the following :
- The number of roots in the left half of s-plane.
 - The number of roots in the right half of s-plane.
 - The number of roots on the imaginary axis. Use the Routh, Hurwitz Criterion.
- (c) Describe the ac servomotors for control application.